







Note & Rest Values

Draw a line from the note or rest to the bottom box with the correct number of beats.



Rhythm Math

Add the number of beats for each equation and write your number answer on the line.

$$\boxed{\text{quarter note}} + \boxed{\text{quarter note}} = \underline{3}$$

$$\boxed{\text{dotted quarter note}} + \boxed{\text{quarter note}} = \underline{\quad}$$

$$\boxed{\text{half note}} + \boxed{\text{quarter note}} = \underline{3}$$

$$\boxed{\text{quarter note}} + \boxed{\text{eighth note}} = \underline{\quad}$$

$$\boxed{\text{quarter note}} + \boxed{\text{quarter note}} = \underline{\quad}$$

$$\boxed{\text{eighth note}} + \boxed{\text{eighth note}} = \underline{\quad}$$

$$\boxed{\text{half note}} + \boxed{\text{quarter note}} = \underline{\quad}$$

$$\boxed{\text{dotted quarter note}} + \boxed{\text{quarter note}} = \underline{\quad}$$

$$\boxed{\text{half note}} + \boxed{\text{half note}} = \underline{\quad}$$

$$\boxed{\text{quarter note}} + \boxed{\text{eighth note}} = \underline{\quad}$$

EVERY measure is missing a rest.

Complete each measure by adding the appropriate rest.



My Composition

on the E string



Composer (your name): _____

Title of your piece: _____

Tempo or character: _____

